

Year 3 - Week 7 – Catshill Home Learning

Hello Year 3,

We are continuing with time telling this week. Did you manage to make your own clock? Remember you can send in photos to be featured on a slideshow on our school website. Email cal27@catshillfirst.worcs.sch.uk and remember to include your name and class.

Subject Suggested Activities – Maths

- ➔ Recap telling the time to the nearest 5 minutes (2 worksheets)
- ➔ Telling the time to the nearest minute (2 worksheets)
- ➔ Friday challenges – Can you complete all 4 challenges?



We are so thrilled by how many Year 3 children have been onto TTRS! The battle was close again... but you managed to win the trophy! A great team effort! ☺ Can you see your Rock name below?

	DANGER VAN LEEUWEN	4,363		JONAH BINGHAM	277
	NOAH BOLIN	1,155		MONK MARTIN	211
	DAVE VELVET	1,018		RIVER LANEGAN	207
	MALCOLM ROCKIT	709		JESSE BACHMANN	176
	JAY BOY SHORE	678		JESSE DEJESUS	140
	WILL BOWIE	636		GODZILLA TWIG	132
	ELVIS AGELL	428		ROCKIN' STATIC	120
	BOBB BUTLER	420		LEGZ KLINE	108
	LAUREN SANTANA	420		LIZ TYNER	98
	ETTA LORRE	385		DEBBIE BAY	75
	ARCH LEE	73		BRANDON MOORE	45
	BIANCA SPRINGSTEEN	68		IMOCK AGELL	36

A new tournament has been set up **3M vs. 3BS**. Log into <https://trockstars.com/> to start earning coins.


Other website links

Lots of parents have shared that they are enjoying the Bitesize videos. Here is the link <https://www.bbc.co.uk/bitesize/subjects/z826n39>. There is even a fun game! Time telling game <https://mathsframe.co.uk/en/resources/resource/116/telling-the-time>


We miss you all. Take care and stay safe!
Miss Moody and Mrs Braiden-Smith ☺



1) Write the time shown on each clock.

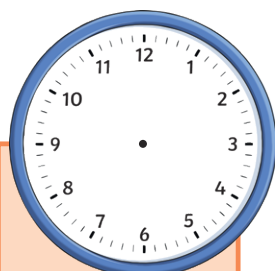


a) _____ to _____

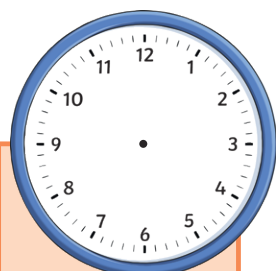


b) _____ minutes past _____

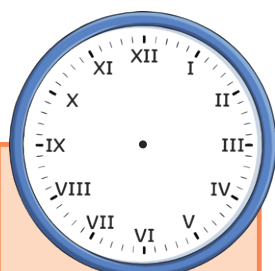
2) Draw hands to show the times given.



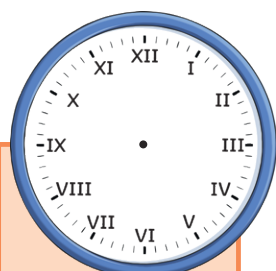
a) 25 past 6



b) 25 to 6



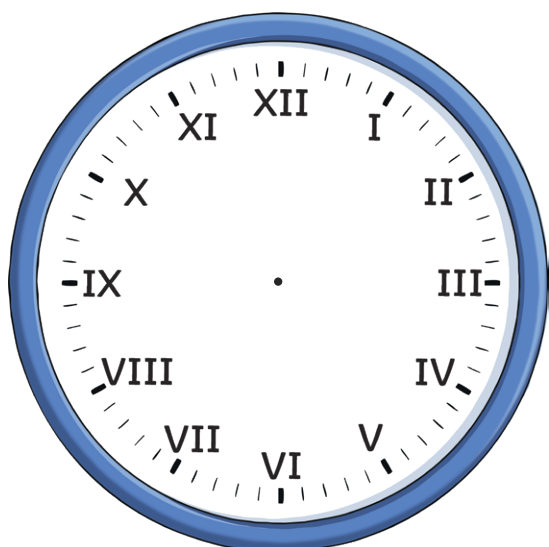
c) quarter past 5



d) quarter to 5



3) This clock uses Roman numerals.



a) If the clock shows 5 minutes to 8, what Roman numeral should the minute hand be pointing to? Please tick the correct answer.

XI

X

IV

VIII

b) What Roman numeral should the hour hand be pointing to when the clock shows 8 o'clock?

1) Match the time to the correct clock face. Which time is left over?

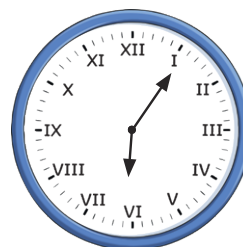




5 minutes past 6


20 minutes to 4

20 minutes past 3


20 minutes past 1



2) Each clockface shows times in the afternoon or evening. Order the times from earliest (1) to latest (6).




3) Year 3 are discussing the time shown on the analogue clock.



Phoebe

The hour hand isn't on 5 so it must be ten minutes to 4.


The clock shows ten minutes to five.



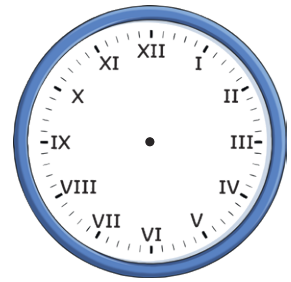

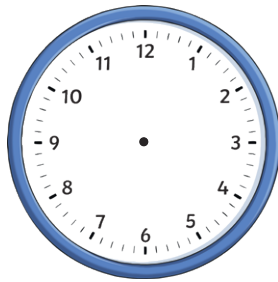
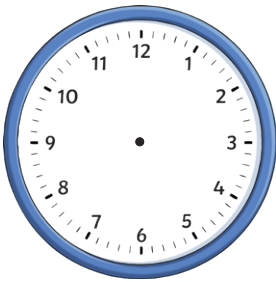
Matthew

Which of the children do you agree with? Explain your answer fully.

1) How many minutes past the hour does the clock show?



2) Draw hands on each clock face to show the correct time.



a) six minutes to 5


b) seven minutes past 4

c) sixteen minutes past 7

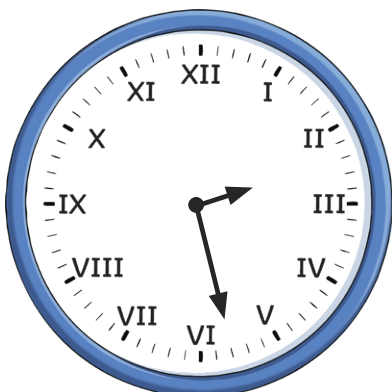
d) sixteen minutes to 7

3) In words, write the times shown below.

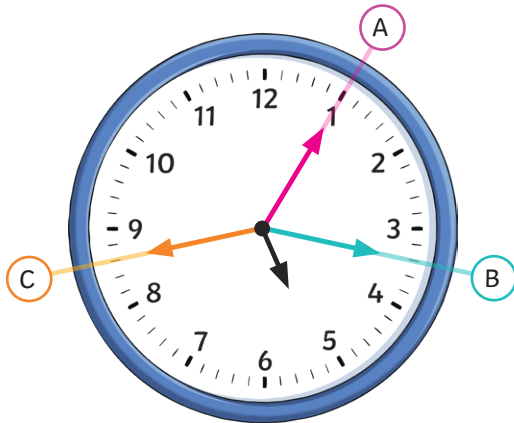
a)




b)




- 1) The time shows seventeen minutes past 5. Which minute hand is correctly positioned? Explain your answer fully.



- 2) Match the time in words to the correct clock face. Circle the time that is left over.




six minutes to 6



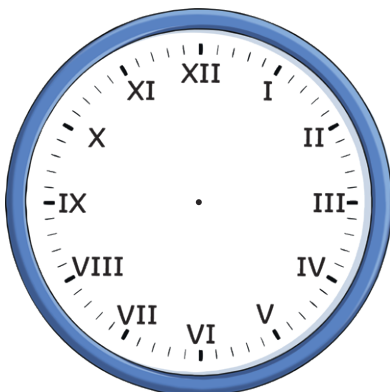
six minutes past 6

twenty-two minutes past 3

twenty-two minutes to 1



- 3) Jason needs to be at the park at half past 8. It takes him 19 minutes to walk there.




- a) Draw hour and minute hands on the clock face to show the exact time that Jason should leave home.

- b) If Jason stays at the park for 30 minutes, what time will he get home?

Challenge 1

Eric bakes these two trays of muffins.



He eats 2 muffins.


His dad eats 3 muffins.

His sister eats 4 muffins.

How many muffins does he have left?

Challenge 2

Lola buys this key ring.



Her mum gives a quarter of the money.

She pays for the rest herself.

How much does she pay herself?

Challenge 3



How old is the teacher?

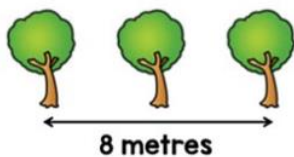
Challenge 4

Ten trees are planted in a row.



The trees are spaced out equally.

The distance between the fourth and sixth tree is 8 metres.



What is the distance between the first and last tree?